



MINISTRY OF EDUCATION
PRIMARY ENGAGEMENT PROGRAMME
GRADE FOUR WORKSHEET
SUBJECT: SOCIAL STUDIES
LESSON 1: WEEK 9

TOPIC: LOCATION OF AMERINDIAN VILLAGES AND TOWNS IN ADMINISTRATIVE REGION

NAME: _____ DATE: _____

FACTS/TIPS:

- Guyana has different kinds of communities.
- Some communities are villages while some are towns.
- Most Amerindian villages are located in the forested and savannah regions of Guyana.

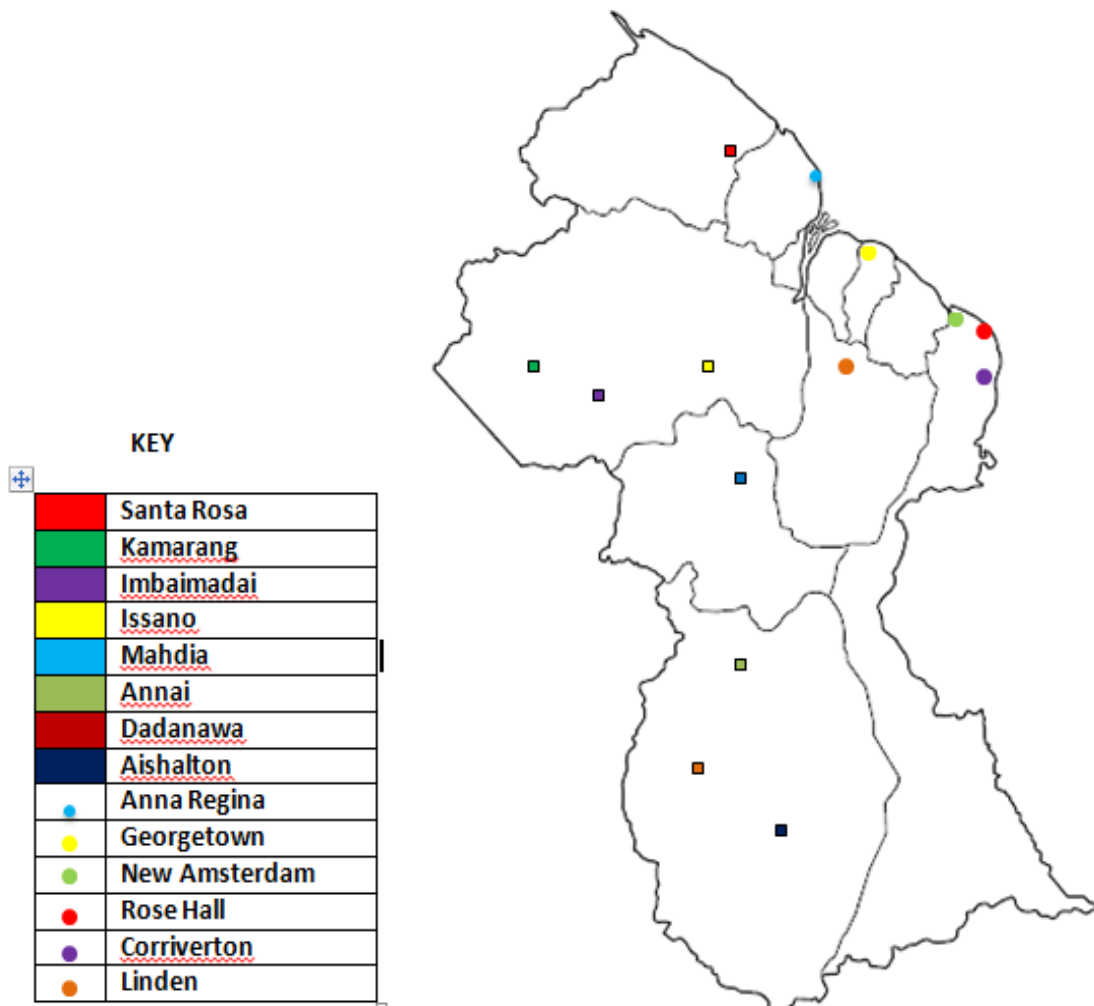
Location of some Amerindian Villages:

Amerindian Village	Administrative Region
Santa Rosa	Region 1
Issano	Region 7
Kamarang	Region 7
Imbaimadai	Region 7
Mahdia	Region 8
Dadanawa	Region 9
Aishalton	Region 9
Annai	Region 9

Towns in Guyana:

Towns	Administrative Regions
Mabaruma	Region 1
Anna Regina	Region 2
Linden	Region 10
Georgetown	Region 4
New Amsterdam	Region 6
Rosehall Town	Region 6
Corriverton	Region 6
Bartica	Region 7
Mahdia	Region 8
Lethem	Region 9

Map of Guyana showing some Amerindian Villages and Towns



OWN YOUR OWN:

ANSWER ALL QUESTIONS.

Write your answers on the lines.

1. Where are most Amerindian villages located?

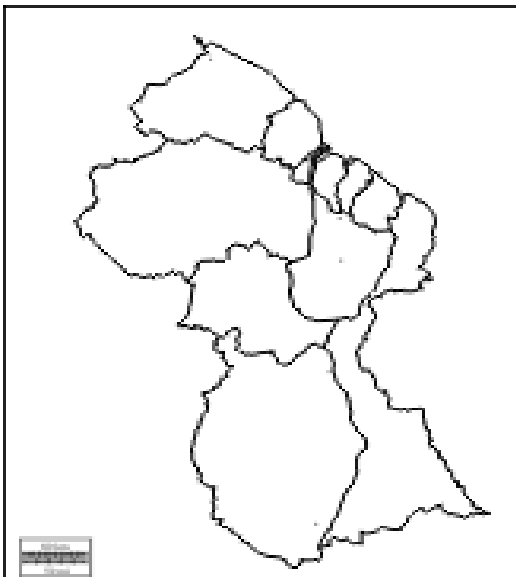
2. Name two towns that are located in Region Six.

Match the Amerindian villages to the Regions in which they can be found.

No.	Amerindian Village	Administrative Region
3.	Issano	Region 7
4.	Mahdia	Region 8
5.	Aishalton	Region 9

HOMEWORK:

On the map of Guyana below, insert the following Towns:



**Linden
Rosehall
Anna
Regina**



MINISTRY OF EDUCATION
PRIMARY ENGAGEMENT PROGRAMME
GRADE FOUR WORKSHEET
SUBJECT: SOCIAL STUDIES
LESSON 2: WEEK 9

TOPIC: LIFESTYLES OF THE PEOPLE LIVING IN AMERINDIAN VILLAGES AND TOWNS

NAME: _____ DATE: _____

FACTS/TIPS:

Amerindian Villages:

- In Amerindian villages, the Amerindians live simple and sometimes nomadic lives.
- They use cassava to make cassava bread and farine which form part of their main diet.
- They fish and hunt by using bows and arrows and blow pipes.
- They sleep in hammocks.
- They use the trunks of trees to make canoes.

Picture showing an Amerindian village



Towns:

- Usually, towns have large numbers of people.
- The streets are often crowded with people and there are many vehicles.
- There are many surfaced roads and important buildings such as offices, stores, markets, factories, banks, hospitals and government buildings.

Picture showing a town:



ON YOUR OWN:

Answer all questions.

Write your answers on the lines.

1. What is the main diet of the Amerindians?

2. The Amerindians use the bow and arrow to fish. Name another tool that the Amerindians use for this purpose?

3. What do the Amerindians use the hammocks for?

4. State two things that can be found in a town but cannot be found in an Amerindian village.

5. The Amerindians make canoes from the trunks of the trees. What do they use these canoes for?

HOMEWORK:

Explain briefly how towns are different from Amerindian villages.



MINISTRY OF EDUCATION
PRIMARY ENGAGEMENT PROGRAMME
GRADE FOUR WORKSHEET
SUBJECT: SOCIAL STUDIES
LESSON: REVIEW WEEK 9

NAME: _____ DATE: _____

ANSWER ALL QUESTIONS.

Write your answers on the line.

1. Why are Amerindian villages located in the forested regions in Guyana?

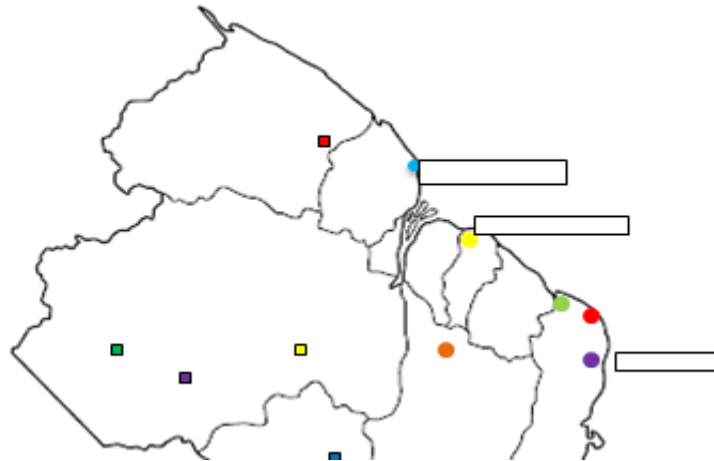
2. Name one Amerindian village that can be found in Region Nine.

3. List two towns in Guyana.

Match the Amerindian villages to the administrative region in which they are located.

No.	Amerindian Village	Administrative Regions.
4.	Annai	Region 7
5.	Santa Rosa	Region 9
6.	Kamarang	Region 1

For questions 7 to 9 use the map below to write the names of the towns indicated near the boxes.



10. What did the Amerindians use the trunk of trees to make?

11. State one difference between a town and a village.

12. State one use of the blow pipe.

Match the towns to the Administrative Region they can be found.

Towns	Administrative Regions
13. Rosehall	Region 10
14. Linden	Region 4
15. Georgetown	Region 6



MINISTRY OF EDUCATION
PRIMARY ENGAGEMENT PROGRAMME
GRADE FOUR WORKSHEET
SUBJECT: SOCIAL STUDIES
LESSON 1: WEEK 10
TOPIC: LANDFORMS OF VARIOUS REGIONS

NAME: _____ DATE: _____

FACTS/TIPS:

Landforms of some regions are different from others.

What are landforms?

Landforms are the natural physical features which are found on the surface of the earth.

Some types of landforms are:

mountains valleys hills plains rivers waterfalls
islands savannahs caves beaches canals cliffs

Pictures of some Landforms of some regions



Regions	Landforms
Region 1	Although some parts are flat, most of it is hilly and sandy
Region 2	Flat plains
Region 3	Flat plains
Region 4	Flat plains and soil made of silt, loam and pegasse
Region 5	Flat plains
Region 6	Flat plains
Region 7	Mountainous and forested
Region 8	Mountainous and vast savannahs
Region 9	Mountainous and vast rolling savannahs
Region 10	Hilly and sandy

**ON YOUR OWN:
ANSWER ALL QUESTIONS.**

Write your answers on the lines.

1. List two types of landforms which can be found in the regions.

2. Name the region (s) which is/are hilly and sandy.

Match the administrative regions to their correct landforms.

Regions

Landforms

Region Two

Mountainous and savannahs

Region Seven

Flat Plains

Region Nine

Mountainous and forested

HOMEWORK:

Write sentences about the landforms of the region in which you live.



**MINISTRY OF EDUCATION
PRIMARY ENGAGEMENT PROGRAMME
GRADE FOUR WORKSHEET
SUBJECT: SOCIAL STUDIES
LESSON 2: WEEK 10
TOPIC: OTHER PHYSICAL FEATURES OF THE REGIONS**

NAME: _____ DATE: _____

FACTS/TIPS: There are other physical features of the Administrative Regions.

Administrative Regions	Physical Features
Region 1	- forests, roads, trails and beaches such as Shell Beach and Almond beach -It forms part of the forested highland area.
Region 2	-Fertile soil, forest, lakes, conservancy, trails - It comprises the forested highland, low coastal plain and a small part of the hilly sand and clay region.
Region 3	-Islands, canals, conservancy, fertile soil -It is the only region that has direct contact with several other regions.
Region 4	-Fertile soil, the north-east trade winds, courida and mangrove -It is mainly low coastal plain and a little hilly sand and clay region further inland.
Region 5	-Rivers, plains, savannahs and hills -A large part of this region is low coastal plain but inland is the Savannahs and hilly sand and clay region.
Region 6	-Forest, rivers, canal, long stretch of road. -Is the only region to include parts of all the four natural regions
Region 7	- Forest, mountains, rivers and waterfalls -It has the forested highlands and the hilly sand and clay region. A small part of the Pakairaima Mountains is found here.

Administrative Regions	Physical Features
Region 8	-Rivers, thick forest, rapids, savannahs, mountains, waterfalls (Kaieteur and Orinduik Falls) -It is forested highland with a part of hilly sand and clay.
Region 9	-Savannahs and mountains -It comprises the Kanuku and Kamoia Mountains and the Interior savannahs.
Region 10	-Forest and sand -It contains a large part of the hilly sand and clay area.

OWN YOUR OWN:
Answer all questions.

Write your answers on the lines.

1. List two physical features of Region Three?

2. Which region has several beaches as one of its physical features?

3. Which region has a part of every natural region?

4. Suggest one way in which regions can use their physical features to their advantage.

HOMEWORK:

List some physical features of the regions given below.

Region Two	Region Five	Region Eight
-------------------	--------------------	---------------------

Name one region you want to visit and say why.



MINISTRY OF EDUCATION
PRIMARY ENGAGEMENT PROGRAMME
GRADE FOUR WORKSHEET
SUBJECT: SOCIAL STUDIES
LESSON: REVIEW WEEK 10

NAME: _____ DATE: _____

ANSWER ALL QUESTIONS.

Write your answers on the line.

1. Which of the following is not a landform in Guyana?

mountains	buildings	rivers	cliffs
------------------	------------------	---------------	---------------





2. Identify two Administrative Regions that have flat plains as their landforms.

3. In which administrative region can you find silt, loam and pegasse soil?

4. Name one mountainous administrative region.

5. Which administrative region includes parts of all the four natural regions?

Match the landforms to the correct images.

No.	Pictures	Landforms
6.		plains
7.		mountains
8.		valleys
		waterfalls

9. The Kaieteur and Orinduik Falls can be found in which region?

Match the regions to their physical features.

No.	Region	Physical features
10.	Region 9	Beaches
11.	Region 10	Savannahs
12.	Region 1	Forest and sand

13. Which administrative region contains a large part of the hilly sand and clay area?

14. Name one beach found in Region One.

15. Identify two physical features of Region Five.



**MINISTRY OF EDUCATION
PRIMARY ENGAGEMENT PROGRAMME
GRADE FOUR WORKSHEET
SUBJECT: SOCIAL STUDIES
LESSON 1: WEEK 11
TOPIC: RESOURCES IN GUYANA**

NAME: _____ **DATE:** _____

FACTS/TIPS:

What is a resource?

A resource is anything natural or man-made that is useful to man.

Guyana's resources are important because they help to develop the country.

Resources in Guyana:

Guyana has many types of resources which the people use to develop their communities.

Some types of resources include:

- Forests
- Minerals
- Agriculture - crop and livestock productions

Forest Resources	Mineral Resources	Agriculture: Crop Production	Agriculture: Livestock production
Timber- Some species are: -Greenheart -Purpleheart -Wallaba -Silverbali -Mora -Crabwood	-Gold -Diamond -Bauxite -Granite	-Rice -Sugar -Coconuts -Citrus and other fruits -Vegetables -Ground provisions	-Cattle -Poultry -Pigs -Sheep -Goats

OWN YOUR OWN:

Answer all questions.

Write your answers on the lines.

1. Explain briefly what is a resource.

2. Name one type of resource in Guyana.

3. State two resources that we can have from the type you mentioned at number 2.

4. Wallaba is a _____ resource in Guyana.

5. One agricultural resource is _____.

HOMEWORK:

Collect samples of any resource. Have a show and tell with your family using the sample.



MINISTRY OF EDUCATION
PRIMARY ENGAGEMENT PROGRAMME
GRADE FOUR WORKSHEET
SUBJECT: SOCIAL STUDIES
LESSON 2: WEEK 11

TOPIC: RESOURCES FOUND IN THE VARIOUS ADMINISTRATIVE REGIONS

NAME: _____ DATE: _____

FACT/TIP: Different resources in Guyana are found in different Regions.

Resources found in the administrative regions are:

Administrative Regions	Resources
Region 1	timber ,coconuts
Region 2	rice,timber, citrus fruits
Region 3	sugar, rice, coconuts
Region 4	rice, sugar manufactured products.
Region 5	rice, sugar, cattle
Region 6	rice, sugar, cattle
Region 7	minerals, stones
Region 8	minerals, timber
Region 9	cattle, timber
Region 10	bauxite timber

OWN YOUR OWN:

Answer all questions.

Write your answers on the lines.

1. Name two regions that produce rice.

2. 'Manufactured products' are a resource found in which administrative region?
-

Match the resources to their regions.

No.	Resource	Region
3.	Bauxite	Region 5
4.	Rice	Region 10
5.	Minerals	Region 8

HOMEWORK:

Which resources are found in your region? Describe how any one of the resources is harvested.



MINISTRY OF EDUCATION
PRIMARY ENGAGEMENT PROGRAMME
GRADE FOUR WORKSHEET
SUBJECT: SOCIAL STUDIES
LESSON: REVIEW WEEK 11

NAME: _____ DATE: _____

ANSWER ALL QUESTIONS.

Write your answers on the line.

1. Explain briefly why resources are important to Guyana.

2. Name two types of resources which are found in Guyana.

Match the resources to their correct types/categories.

No.	Resources	Type/ category
3.	Bauxite	crop production
4.	Coconut	forest
5.	Crabwood	mineral

6. State one livestock which is reared in Guyana.

7. Circle the resource mentioned in the box below which is a mineral resource.

citrus granite silverbali crabwood

8. Name three administrative regions that produce sugar.

Match the administrative regions to their resources.

No.	Region	Region
9.	Region 4	Timber
10.	Region 8	Cattle
11.	Region 9	Sugar

12. List two species of timber that are grown in Guyana's forest.

Study the economic activities listed above and answer question 13.

bauxite mining	cattle ranching	rice farming
----------------	-----------------	--------------

13. In which activity mentioned above, are the people of Linden mainly engaged ?

14. The main economic activity of the people of Region Nine is

15. In which administrative region do citrus fruits grow abundantly?



**MINISTRY OF EDUCATION
PRIMARY ENGAGEMENT PROGRAMME
GRADE FOUR WORKSHEET
SUBJECT: SOCIAL STUDIES
LESSON 1: WEEK 12
TOPIC: ECONOMIC ACTIVITIES OFVARIOUS ADMINISTRATIVE REGIONS**

NAME: _____ **DATE:** _____

FACT/TIP:

In the administrative regions there are different economic activities. These economic activities depend on the resources found in the particular regions.

Economic activities in the Administrative Regions

Administrative Region	Economic Activities
Region 1	-Logging -Gold and diamond mining -Growing of ground provision, coffee and fruits
Region 2	-Cultivation of rice, ground provision, coffee, vegetables, citrus and coconut -Lumbering
Region 3	-Cultivation of rice, sugar, pineapples, ground provisions, vegetables, pepper and coconuts
Region 4	Cultivation of rice, sugar, coconuts and ground provisions
Region 5	- Cultivation of rice, sugar and coconuts -Rearing of cattle mainly for meat and milk
Region 6	-Rice and sugar cultivation, coconut farming -Timber production and logging -Rearing of cattle for meat and milk
Region 7	-Mining for gold, diamond and precious stones -Timber production -Charcoal production

Administrative Region	Economic Activities
Region 8	-Mining for gold and diamond - Timber production -Logging
Region 9	-Rearing of cattle for meat and milk -Tobacco and peanut farming -Growing of cassava, corn, beans and other crops -Mining for semi-precious stones -Balata bleeding
Region 10	-Bauxite mining. -Timber production

OWN YOUR OWN:

Answer all questions.

Write your answers on the lines.

1. State the main economic activities in Region Nine.

Study the economic activities in the box below and answer question 2.

Mining for gold, diamond and precious stones
Timber production

2. From which administrative region are the economic activities carried out?

3. List three regions that have gold and diamond mining as their economic activity.

4. What are two economic activities which are done in Region Four?

5. Name three regions in Guyana where rice cultivation is carried out.

HOMEWORK:

List the economic activities for the administrative regions identified below.

Region 2	
Region 7	
Region 8	
Region 9	



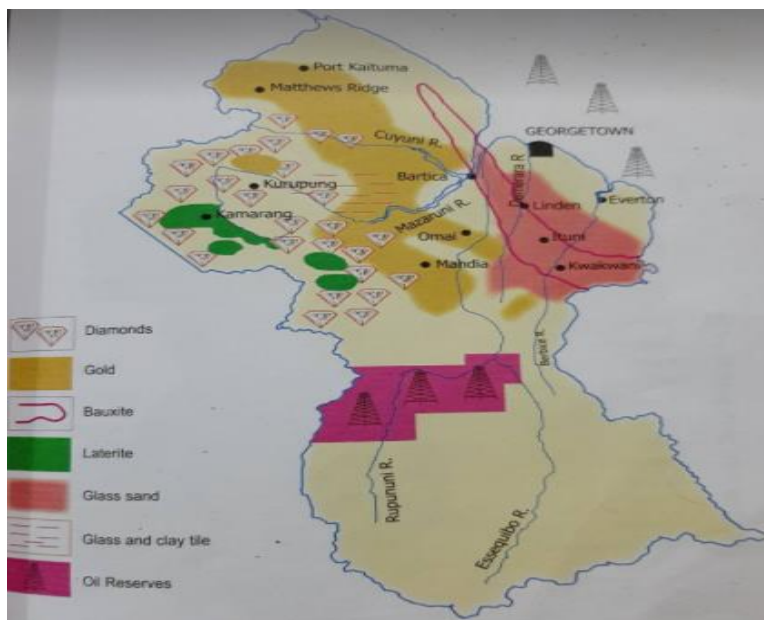
MINISTRY OF EDUCATION
PRIMARY ENGAGEMENT PROGRAMME
GRADE FOUR WORKSHEET
SUBJECT: SOCIAL STUDIES
LESSON 2: WEEK 12
TOPIC: RESOURCES IN GUYANA:
MAP OF GUYANA SHOWING RESOURCES

NAME: _____ DATE: _____

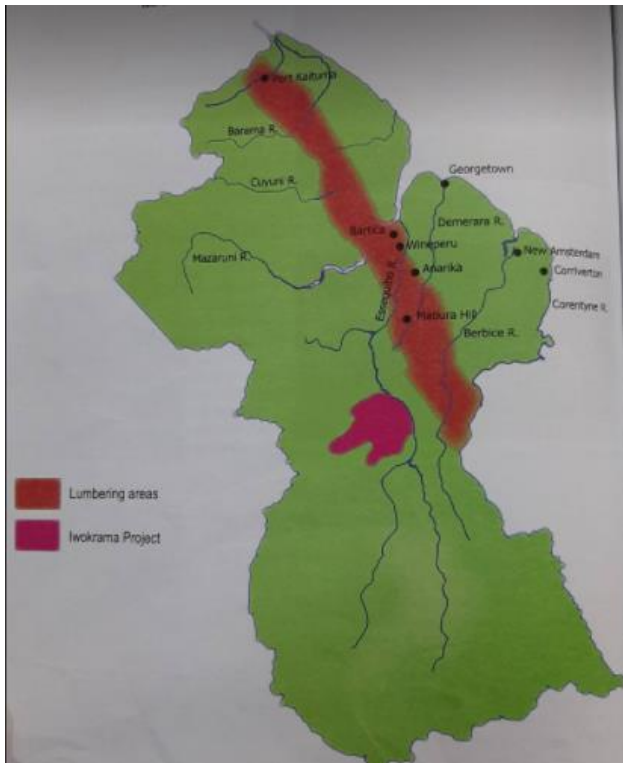
FACTS/TIPS:

- To develop any community, resources are necessary. Resources are living and non-living materials which are useful to a country and its people.
- Some of Guyana's most important resources are gold, diamond, bauxite, timber, rice and sugar.

Map of Guyana showing mineral resources



Map of Guyana showing the lumbering areas and the Iwokrama project



OWN YOUR OWN:

Answer all questions.

Write your answers on the lines.

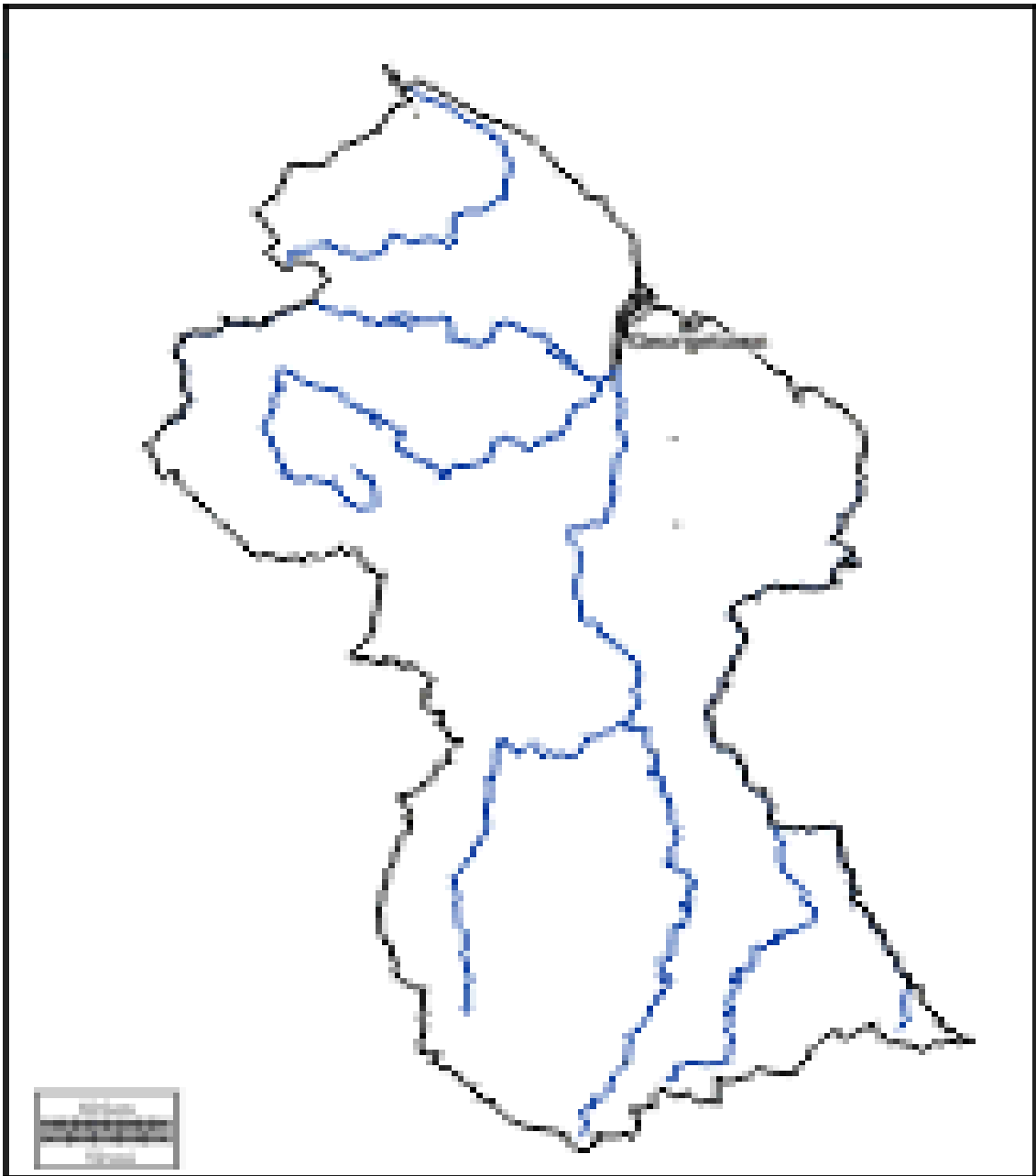
1. Why are resources useful to a country?

2. List two of Guyana's important resources.

3. Name one resource which can be obtained from Guyana's forest.

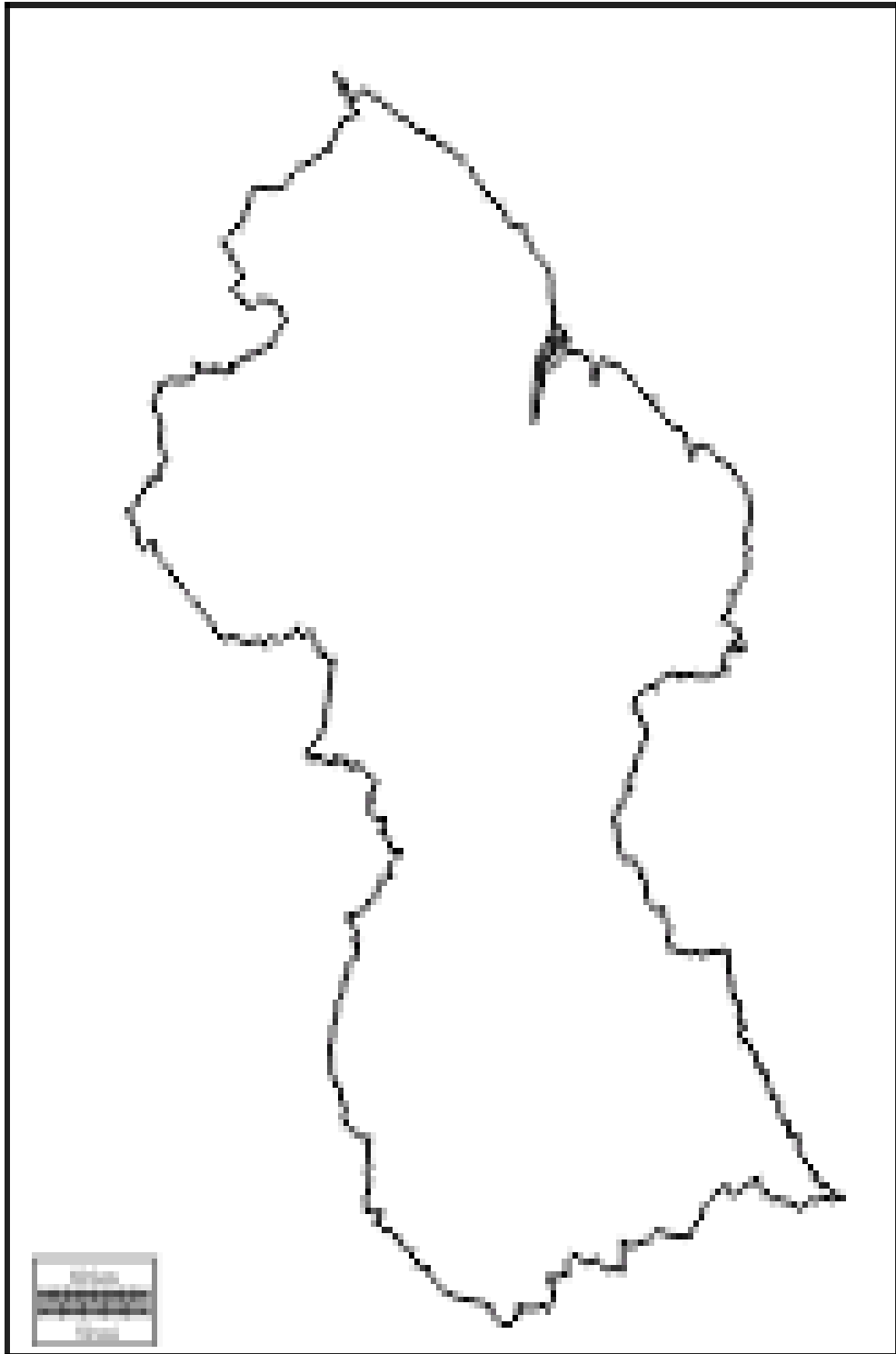
Use the map of Guyana below to complete questions 4 and 5.

4. Use yellow to show the gold mining areas of Guyana.
5. Use red to show the bauxite mining areas.



HOMEWORK:

Use the map of Guyana below to insert the mineral resources in Guyana.





**MINISTRY OF EDUCATION
PRIMARY ENGAGEMENT PROGRAMME
GRADE FOUR WORKSHEET
SUBJECT: SOCIAL STUDIES
LESSON: REVIEW WEEK 12**

NAME: _____ **DATE:** _____

ANSWER ALL QUESTIONS

Write your answers on the line.

1. Name one economic activity which the residents of Region One are engaged in.

2. In which administrative region is bauxite mining done extensively?

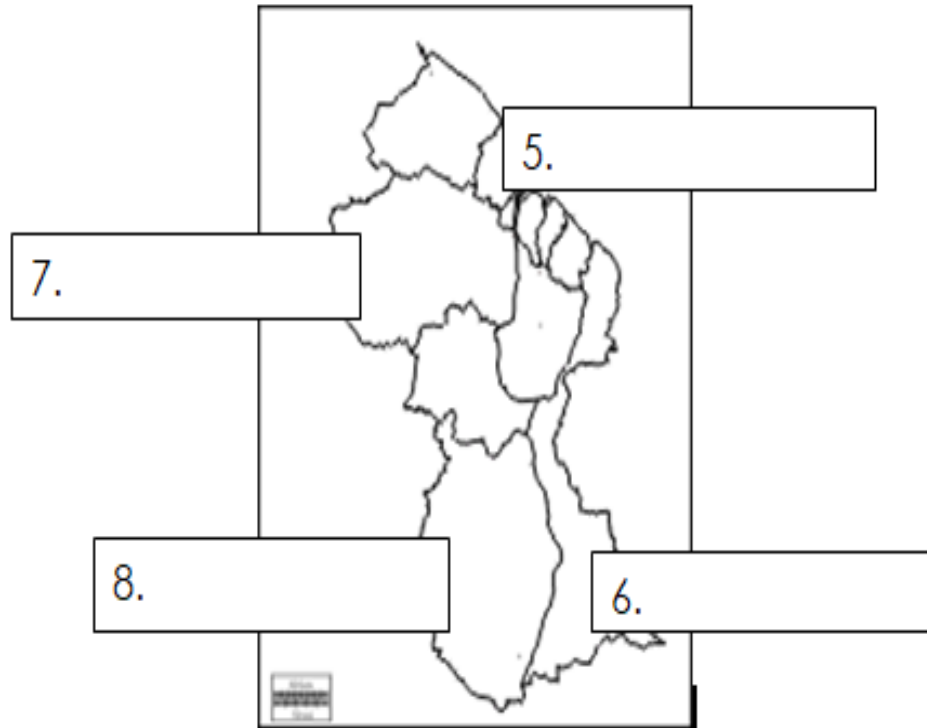
3. List two economic activities that are done in Region Seven.

4. In which administrative region are the following economic activities done?

**-Mining for gold and diamond
-Timber production
-Logging**

Study the map below and complete questions 5 to 8.

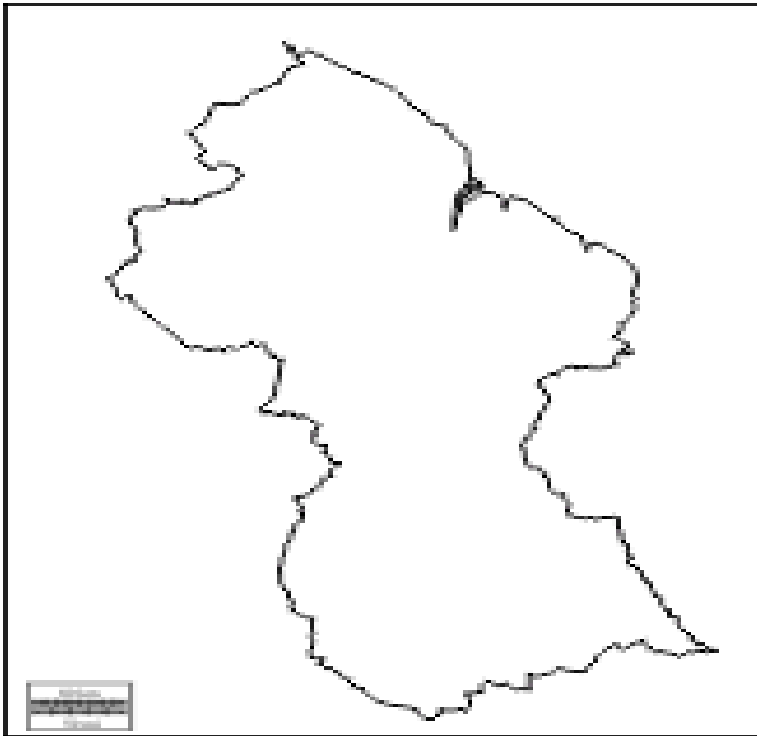
Write two economic activities in each box for the administrative region they indicate.



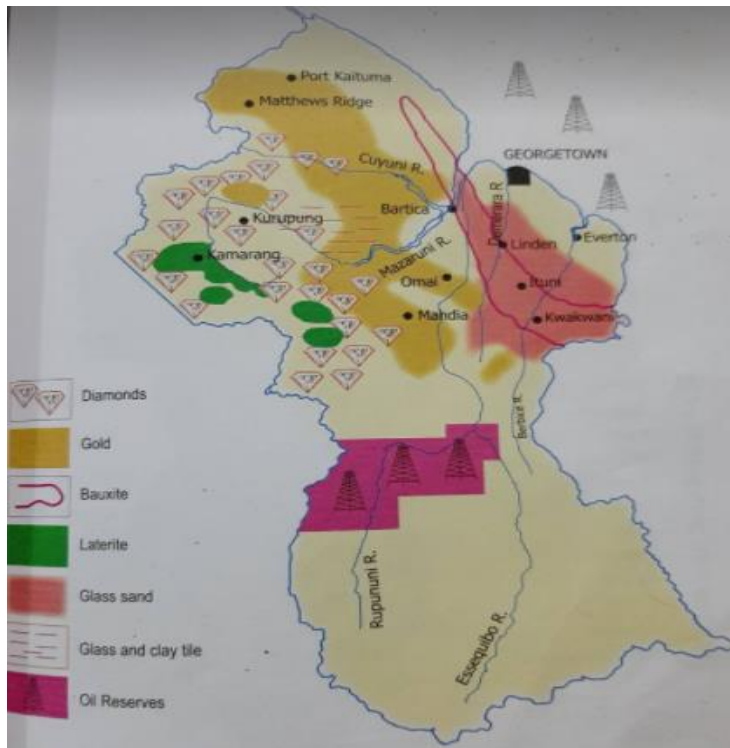
Match the economic activities to the administrative regions in which they are carried out.

No.	Economic Activity	Administrative Region
9.	Balata bleeding	Region 7
10.	Charcoal production	Region 10
11.	Bauxite mining	Region 9

12. Use the map below to insert the main lumbering areas in Guyana.



Below is a map of Guyana showing some main mineral resources. Study it and answer questions 13 to 15.



13. Name one gold mining area shown on the map.

14. Which is Guyana's mining town?

15. Name the mineral which is found in the Kurupung area.
