



**MINISTRY OF EDUCATION
GRADE THREE CONSOLIDATED WORKSHEET
SOCIAL STUDIES WEEK 12
TOPIC: THE ETHNIC GROUPS**

NAME: _____

DATE: _____

FACTS/TIPS:

The picture below shows some ethnic groups in Guyana.



There are six ethnic groups living in Guyana.

These are the:

- Amerindians
- Europeans
- Africans
- East Indians
- Portuguese
- Chinese

ON YOUR OWN

1. How many ethnic groups are living in Guyana?

2. Name two ethnic groups living in Guyana.

3. On the picture below place an X on the East Indian child.



4. The ethnic groups are called Guyanese. TRUE / FALSE.

HOMEWORK:

Make a list of the groups of people who are living in Guyana.

- 1.
- 2.
- 3.
- 4.
- 5.
- 6.



MINISTRY OF EDUCATION
GRADE THREE CONSOLIDATED WORKSHEET
SOCIAL STUDIES
WEEK 12

TOPIC: THE ETHNIC GROUPS- THE CONTINENTS THEY CAME FROM

NAME: _____

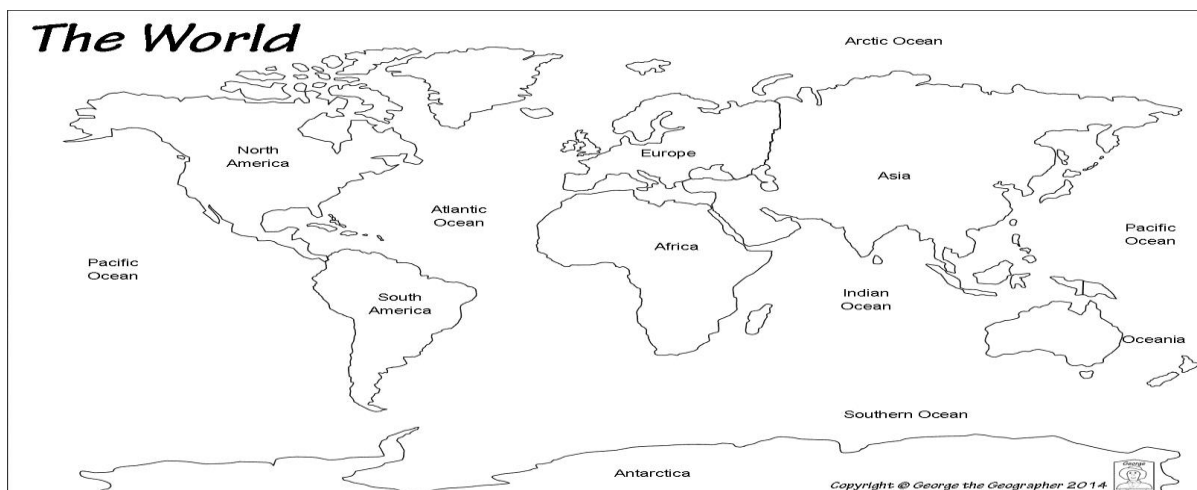
DATE: _____

FACTS/TIPS:

The ethnic groups came from different continents around the world.

Some of these continents are:

- Asia
- Europe
- Africa



The continents each ethnic groups came from:

Continent	Groups
Asia	Amerindians East Indians Chinese
Europe	Europeans Portuguese
Africa	Africans

ON YOUR OWN

1. Name the continents from which the ethnic groups came.

2. Name two ethnic groups that came from the same continent.

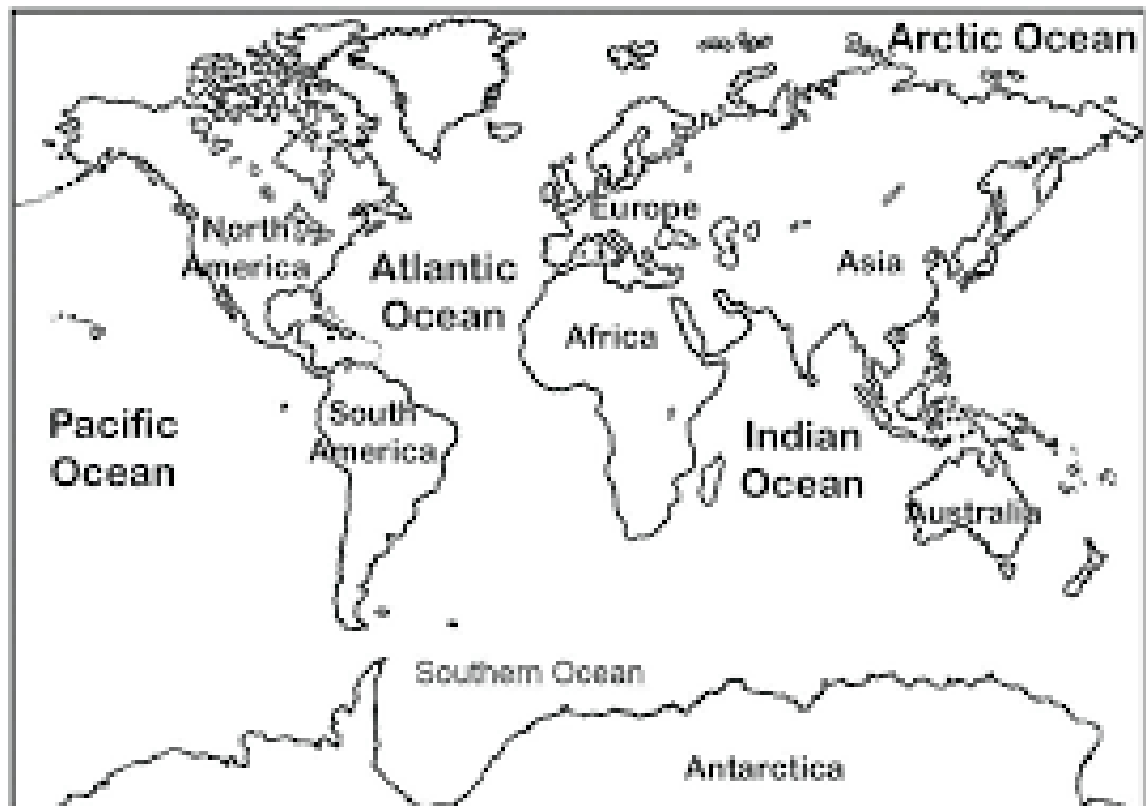
3. How many ethnic groups came from the continent of Asia?

Match the ethnic groups to the continents they came from.

Ethnic Group	Continent
4. Europeans	Asia
5. Africans	Europe
6. East Indians	Africa

HOMEWORK:

On the map of the world below, colour the continents from which the ethnic groups came.





MINISTRY OF EDUCATION
GRADE THREE CONSOLIDATED WORKSHEET
SOCIAL STUDIES
WEEK 12

TOPIC: THE AMERINDIANS-WHY DID THEY COME TO GUYANA?

NAME: _____

DATE: _____

FACTS/TIPS:

Picture showing the Amerindians.



-The Amerindians were the first group of people who came to Guyana.

-They are called the indigenous people.

-They came from the continent of Asia to the Americas by way of an ice bridge called the Bering Strait.

-They followed herds of cattle and buffaloes until they reached new lands.

-They came in search of food and warmth.

Map of the world showing how the Amerindians came.



ON YOUR OWN

1. Which was the first group of people to come to Guyana?

2. Which continent did they come from?

3. Who were referred to as the indigenous people?

4. Give one reason why the Amerindians came to Guyana.

5. The Amerindians crossed an ice bridge in order to reach the Americas. TRUE / FALSE.

HOMEWORK: On the map below colour the continent from which the Amerindians came.



Find out why the Amerindians were called Indigenous people? _____



**MINISTRY OF EDUCATION
GRADE THREE CONSOLIDATED WORKSHEET
SOCIAL STUDIES
WEEK 12
TOPIC: HOW THE AMERINDIANS LIVED**

NAME: _____

DATE: _____

FACTS/TIPS:

When the Amerindians arrived in Guyana they brought their own way of life.

- The Amerindians lived in benabs.
- They were great hunters and fishermen.
- They used the arrow and bow, blowpipe and spear to hunt and fish.
- They were also great craftsmen.
- They made fire and weapons from stones and bones.
- They used the skin from animals to make their clothing.
- The areas where they lived are called settlements. Each settlement has a leader called a Touchau or a captain.

Picture of a benab



Picture of a bow and arrow used for hunting.



ON YOUR OWN

1. What is the name given to an Amerindian house?

2. Name one weapon the Amerindians used to hunt.

3. What did the Amerindians use to make their clothing?

Look at the picture below and answer question 4.



4. What weapon is the Amerindian using in the picture?

5. The leader of an Amerindian settlement is called a Touchau. TRUE / FALSE.

HOMEWORK:

Draw the home of an Amerindian and write two sentences about it.



MINISTRY OF EDUCATION
GRADE THREE CONSOLIDATED WORKSHEET
SOCIAL STUDIES
WEEK 12
TOPIC: CONTRIBUTIONS OF THE AMERINDIANS

NAME: _____

DATE: _____

FACTS/TIPS: The Amerindians made several contributions to Guyana.

They named several places in Guyana.

- They named many rivers such as Cuyuni and Mazaruni.
- They named many waterfalls such as Kaieteur, Amatuk and Waratuk.
- They named our country 'Guiana', which is now called Guyana.
This means 'watery country' or 'land of many waters'.
- They named the town of 'Bartica' which means Red Earth.
- The Amerindians also introduced 'Mashramani' which means celebration after a hard cooperative effort.

Foods	Crafts	Dances
The staple diet of the Amerindians is cassava. <ul style="list-style-type: none">- cassava bread- Farine- cassareep- pepperpot- tasso Drink: <ul style="list-style-type: none">- piwari- casiri	<ul style="list-style-type: none">- hammock- Nibbi furniture- baskets- tibusiri mats- tibusiri bags- beaded ornaments- beaded jewellery	<ul style="list-style-type: none">-Mari-Mari-Baboon-Sun dances

Foods



tasso



pepperpot



farine



cassava- bread

Crafts



ON YOUR OWN

1. What is the staple diet of the Amerindians?

2. The Mari-Mari is a _____ of the Amerindians.

Match the contributions to their categories.

Contribution	Category
3. cassareep	dance
4. hammock	food
5. baboon	craft

6. Which river below was not named by the Amerindians?

Mazaruni River Essequibo River Cuyuni River

7. Name one place that was named by the Amerindians.

8. List two waterfalls that were named by the Amerindians.

9. What is the meaning of the word 'Guiana'?

10. Which place named by the Amerindian means 'Red Earth'?

HOMEWORK:

1. List two rivers which were named by the Amerindians.

2. Kaieteur is to waterfall as Cuyuni is to _____.

3. Which waterfall was not named by the Amerindians?

Amatuk	Niagara	Waratuk
--------	---------	---------

4. What does the word "Guiana" mean?

5. Who gave our country its name?

6. Which place in Guyana means 'Red Earth'?

7. Mashramani means celebrations after hard cooperative work.
TRUE / FALSE.

Match the contributions made by the Amerindians to their categories.

Contribution	Category
8. Pepperpot	dance
9. tibusiri mats	food
10. mari mari	craft

11. What is the main diet of the Amerindians?

12. List two foods the Amerindians made from cassava.

13. Name two drinks the Amerindians made.

14. Baboon is to dance as _____ is to food.

15. The Amerindians were great craftsmen. Name the craft shown in the picture below.





**MINISTRY OF EDUCATION
GRADE THREE CONSOLIDATED WORKSHEET
SOCIAL STUDIES
REVIEW 12
TOPIC: THE AMERINDIANS**

NAME: _____ **DATE:** _____

1. There are _____ ethnic groups living in Guyana.

2. List three of these ethnic groups.

3. Name two continents from which the ethnic groups came.

4. Three groups of people came from the continent of _____.

Match the groups of people to the continents they came from.

Groups of people	Continents
5. Portuguese	Asia
6. Chinese	Africa
7. Africans	Europe
8. Amerindians	

9. Name the two groups of people that came from Europe.

Study the map below and answer questions 10 and 11.

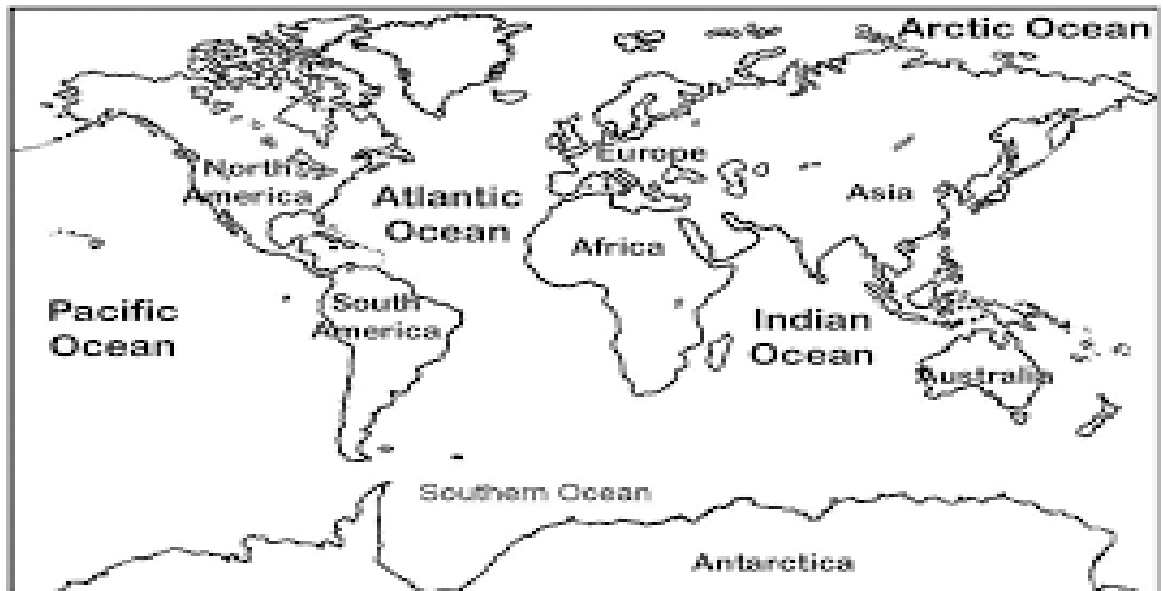


10. What is the name of the continent that is in green?

11. Which ethnic group came from the continent in green?

On the map below colour to show the following.

- 12. Colour in blue the continent from which the East Indians came.
- 13. Colour in red the continent from which only one ethnic group came.
- 14. Colour in green the continent of Europe.



15. The ethnic groups living in Guyana are called Guyanese.

TRUE / FALSE.

16. Name the first group of people who came to Guyana.

17. Which group is called the indigenous people?

18. What is the name of the ice bridge the Amerindians crossed while coming to Guyana?

19. Name one kind of animal that the Amerindians followed in order to reach new lands.

20. The Amerindians came in search of _____ and warmth.

Study the picture below and answer the questions.



21. The picture shows the home of a/an _____.
22. This home is called a _____.
23. What do we call the areas where Amerindians lived?

24. List two weapons the Amerindians used for hunting.

25. The Amerindians used the skin of animals for
_____.
26. The leader of an Amerindian village is called a
_____.
27. The Amerindians were great hunters and fishermen. TRUE / FALSE
Study the picture and answer questions 28- 30.



28. What weapon is the Amerindian using in the picture?

29. What can such a weapon be used for?

30. Name one other weapon that can be used for that purpose.
