



MINISTRY OF EDUCATION  
GRADE THREE CONSOLIDATED WORKSHEET  
SOCIAL STUDIES  
WEEK 2

TOPIC: OUR COMMUNITY: COMMUNITIES IN THE ADMINISTRATIVE REGIONS

Name: \_\_\_\_\_

Date: \_\_\_\_\_

**FACTS/ TIPS:**

- A community is a place where people live and work together.
- A community forms part of an Administrative Region. All communities have names.

**Some communities found in the Administrative Regions are:**

Regions	Communities
1	Mabaruma, Port Kaituma
2	Dartmouth, Good Hope, Charity
3	Uitvlugt, Wakenaam, Parika
4	Victoria, Stabroek
5	Bush Lot, Belladrum, Rosignol
6	New Amsterdam, No. 2 Village, East Canje, Corriverton
7	Bartica, Kamarang
8	Paramakatoi, Kato, Mahdia
9	Aishalton, Lethem
10	Mc Kenzie, Kwakwani, Linden

**ON YOUR OWN**  
**Answer the questions**

1. A place where people live and work together is called a \_\_\_\_\_.

2. What is the name of your community?

\_\_\_\_\_

3. In which region is it located?

\_\_\_\_\_

4. What is the name of the region mentioned at question 3?

\_\_\_\_\_

5. Name three communities found near your community.

\_\_\_\_\_

\_\_\_\_\_

\_\_\_\_\_

**HOMEWORK**

\_\_\_\_\_

3. In which region is it located?

\_\_\_\_\_

4. What is the name of the region mentioned at question 3?

\_\_\_\_\_

5. Name three communities found near your community.

\_\_\_\_\_

\_\_\_\_\_

---

**Paste a picture of/ draw your community.**



MINISTRY OF EDUCATION  
GRADE THREE CONSOLIDATED WORKSHEET  
SOCIAL STUDIES  
WEEK 2

TOPIC: OUR COMMUNITY: COMMUNITIES IN THE ADMINISTRATIVE REGIONS CONT'D

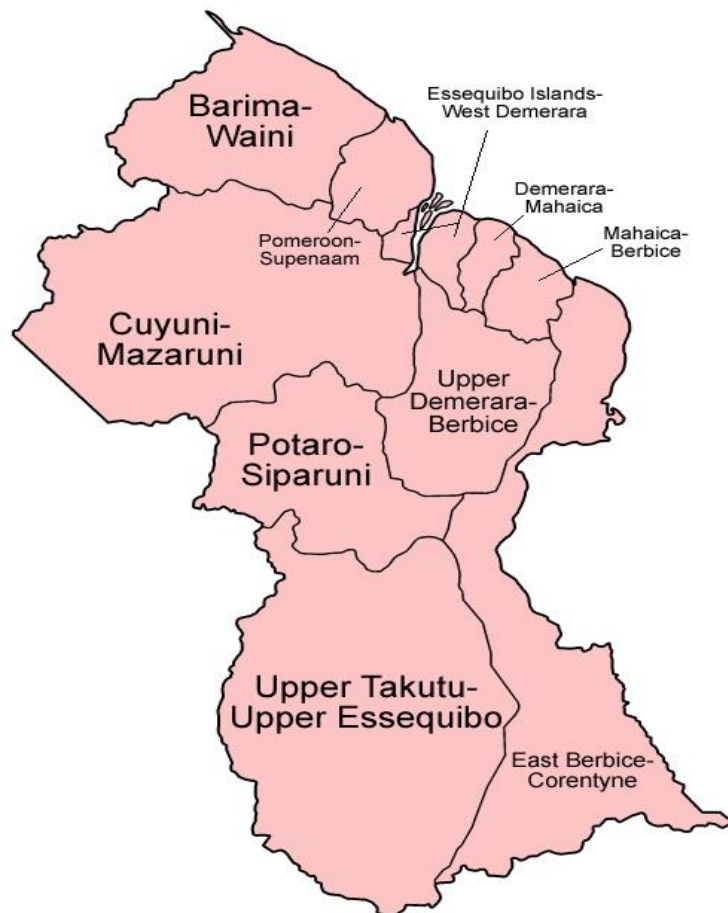
NAME: \_\_\_\_\_

DATE: \_\_\_\_\_

**FACTS/TIPS:**

Communities are found in all Administrative Regions in Guyana.

**Map of Guyana showing communities in the various Administrative Regions**



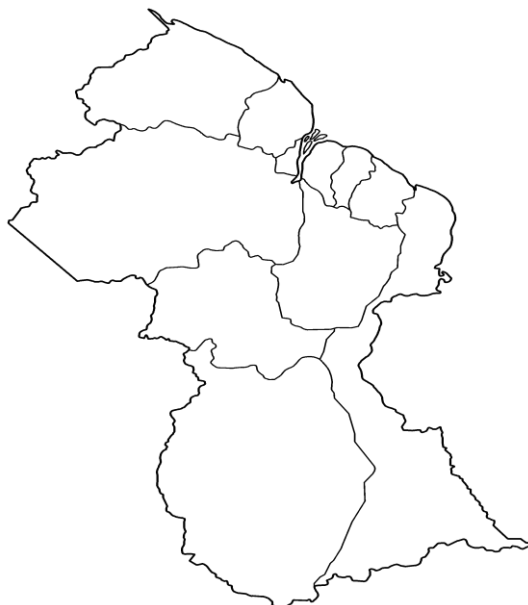
## ON YOUR OWN

Study the map above then match the community with the region in which it is located.

#1 Barima- Waini	Corriverton
#2 Pomeroon Supenaam	Mabaruma
#3 Essequibo Island West Demerara	Bartica
#4 Demerara Mahaica	Diamond
#5 Mahaica Berbice	Rosignal
#6 East Berbice Corentyne	Lethem
#7 Cuyuni- Mazaruni	Parika
#8 Potaro-Siparuni	Charity
#9 Upper- Takutu -Upper Essequibo	Mahdia
#10 Upper- Demerara Berbice	Linden

## HOMEWORK

Colour the region in which your community is found.





**MINISTRY OF EDUCATION  
GRADE THREE CONSOLIDATED WORKSHEET  
SOCIAL STUDIES  
WEEK 2  
TOPIC: OUR COMMUNITY- TYPES OF COMMUNITIES**

**NAME:** \_\_\_\_\_

**DATE:** \_\_\_\_\_

**FACTS/TIPS:**

There are many types of communities. Each type of community can be described by the work people mainly do in the area. E.g. fishing, farming, hunting, mining, etc.

**Types of communities**

**Farming communities**

Many of these communities are found on flat lands. In a farming community the people living there do a lot of farming.



**Fishing communities**

Many of these communities are found near the river or sea. In a fishing community, the people living there depend on the waters to do fishing.



**Mining communities**

Many of these communities are found inland. In a mining community, the people living there depend on the mining industry for a living.

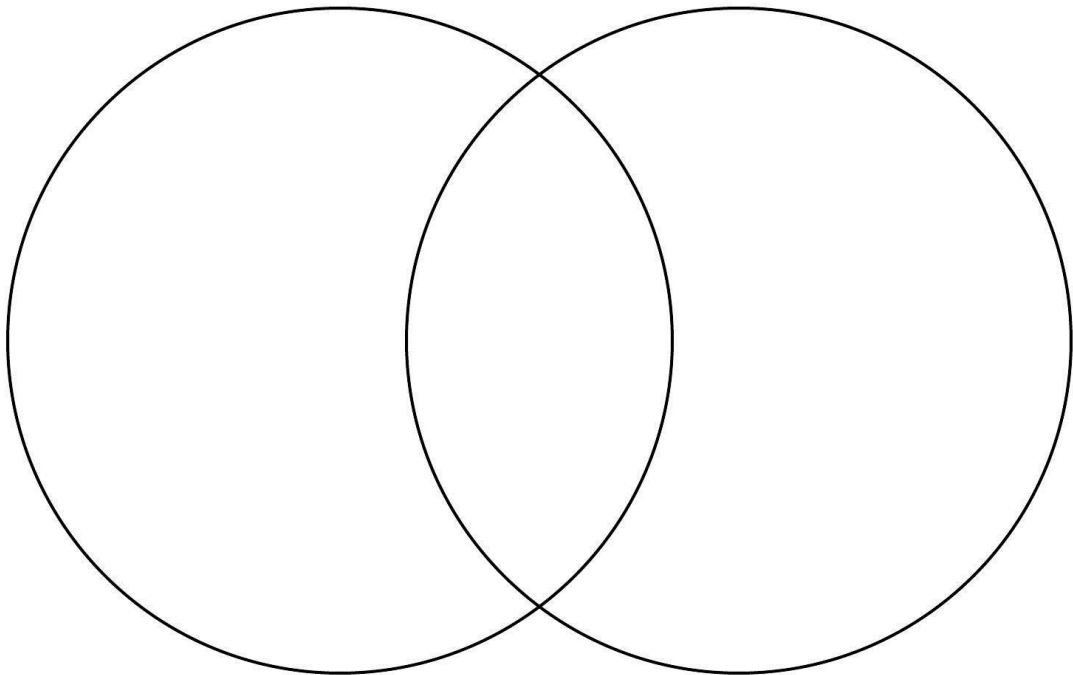


**ON YOUR OWN**

Use the Venn diagram below to write the differences between the communities.

**Fishing community**

**Farming community**



Differences

Similarities

Differences

**HOMEWORK:**

Write the name of one other type of community and paste a picture of it.



MINISTRY OF EDUCATION  
GRADE THREE CONSOLIDATED WORKSHEET  
SOCIAL STUDIES  
WEEK 2

TOPIC: THE ECONOMIC IMPACT OF EACH TYPE OF COMMUNITY

NAME: \_\_\_\_\_ DATE: \_\_\_\_\_

The various types of communities play an important role in the economic development of a country. In Guyana our economy is based mainly on farming and mining and most recently, oil.

**How the activities benefit the communities**

- **The farming communities** provide the local vegetables or fruits we enjoy. Every glass of milk and locally produced food that we eat contribute to our health, and generate income.
- They create jobs not only for farmers but suppliers and manufacturers.
- **The fishing communities** are one of the major sources of food supply.
- They also create jobs for boat building, supply, repair, etc
- **The mining communities** provide Guyana's mineral wealth: gold, diamond and bauxite.
- They provide job opportunities for many young people.



# ON YOUR OWN

Match the community to its local produce.

Communities	Goods Produced
Farming communities	
Fishing communities	
Mining communities	

## HOMEWORK:

Write a short paragraph telling your friend about the type of community you belong to. Name and describe the activities done there.

.....

.....

.....

.....

.....

.....

.....



MINISTRY OF EDUCATION  
GRADE THREE CONSOLIDATED WORKSHEET  
SOCIAL STUDIES

Review 2

TOPIC: OUR COMMUNITY- TYPES OF COMMUNITIES AND IMPACT ON THE ECONOMY

NAME: \_\_\_\_\_ DATE: \_\_\_\_\_

Answer the following questions.

1. What is a community?  
\_\_\_\_\_
2. Georgetown is to Region Four as Bartica is to Region \_\_\_\_\_.
3. John lives in Mabaruma. He is from Region \_\_\_\_\_.
4. Which is **not** a characteristic of a community? Circle it.
  - a) Living in the same area
  - b) Sharing of ideas
  - c) Fighting with each other
  - d) Talking to each other
5. Name three communities that are found in your region.  
\_\_\_\_\_  
\_\_\_\_\_  
\_\_\_\_\_
6. How many types of communities are there?
  - a)3
  - b)5
  - c)7

d) There are many. We cannot count them all.

7. Fish is to fishing community as gold is to

\_\_\_\_\_community.

8. When Greg goes to work, he digs for gold. His job is not meant for people who are afraid of taking risks. Greg works in a

\_\_\_\_\_community.

**Study the picture below, then answer the questions.**



9. What type of community is seen in the picture?

\_\_\_\_\_

10. Name one activity done in that community.

\_\_\_\_\_

11. How does that type of community benefit the economy?

\_\_\_\_\_