


Name: .....

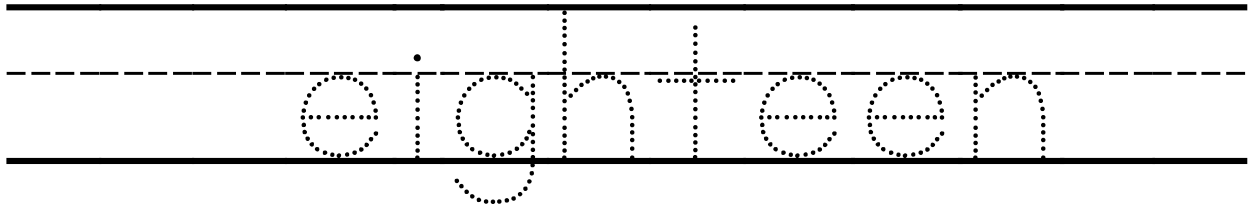
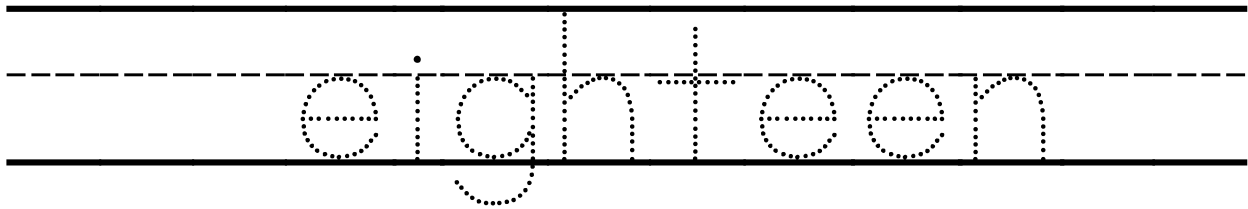
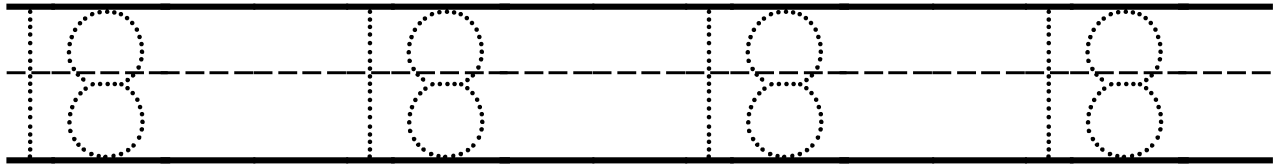
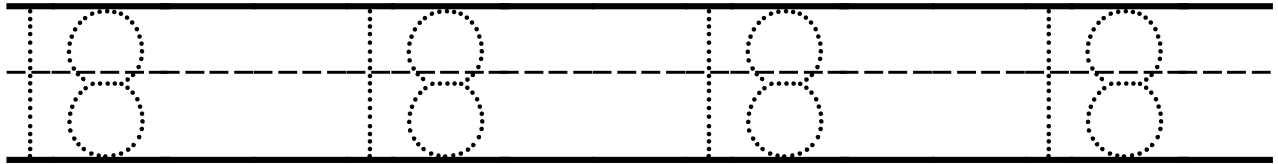
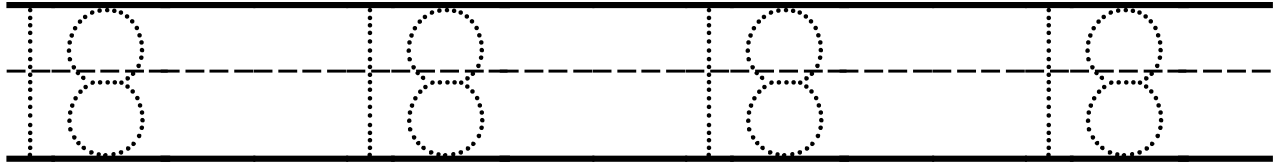
Instructions: Count and colour **18** foxes only.



Year 2 Week 4 Day 1

\_\_\_\_\_  
Name: .....  
\_\_\_\_\_

**Instruction** Trace the numeral and the numeral names.



Year 2 Week 4 Day 2

\_\_\_\_\_  
**Name:** .....  
\_\_\_\_\_

**Instruction:** Draw 18 boxes in the space below. Spell the numeral name.

A large empty rectangular box for drawing 18 boxes to spell the numeral name.

**eighteen**

Name: .....

**Instruction:** Trace then write the numerals.

0		6		12		18	
1		7		13		19	
2		8		14		20	
3		9		15			
4		10		16			
5		11		17			

Name: .....

**Instructions:** Read then solve the problem. Use the picture clues.

If Fox  has 2   cups and  Ox gives him    3 more.

How many cups does Fox have altogether?



$$2 + 3 = \boxed{\phantom{00}}$$

$$\begin{array}{r} 2 \\ +3 \\ \hline \hline \end{array}$$

### Middle Numbers

Write the number that comes in the middle.

4  6

1  3

7  9

13  15

10  12

16  18